



## ČTENÍ A PSANÍ

**Přečti. Mezi obrázky najdi správnou odpověď. Spoj otázku se správnou odpovědí.**


Kde bydlí král?



Čím stříháme papír?



Co je na nebi?



Kdo nemá nohy?



Kde se koupeme?



**Slova přečti a potom je zařad' do správného domečku.**

jahoda, kocour, mrkev, žirafa, malina, pero, banán, celer, guma,  
ananas, hroch, talíř, váza, okurka, pes, hrách, taška, lev, cibule,  
hruška

**zvířata**

---

---

---

---

---

---

**ovoce**

---

---

---

---

---

---

**zelenina**

---

---

---

---

---

---

**věci**

---

---

---


---

---

---

# MATEMATIKA

POROVNEJ < = >



8		6
2		9
6		3
1		8
4		5
7		7
9		2
5		10
15		13
11		18
14		14
12		10
17		15

**S pomocí kalkulačky vypočítej tyto příklady.**

$17 + 1 = \underline{\quad}$

$15 + 1 = \underline{\quad}$

$3 + 15 = \underline{\quad}$

$11 + 7 = \underline{\quad}$

$11 + 5 = \underline{\quad}$

$16 + 3 = \underline{\quad}$

$12 + 1 = \underline{\quad}$

$2 + 13 = \underline{\quad}$

$17 + 2 = \underline{\quad}$

$2 + 15 = \underline{\quad}$

$1 + 11 = \underline{\quad}$

$19 + 1 = \underline{\quad}$

$6 + 13 = \underline{\quad}$

$4 + 13 = \underline{\quad}$

$14 + 5 = \underline{\quad}$

$6 + 14 = \underline{\quad}$

$7 + 12 = \underline{\quad}$

$13 + 7 = \underline{\quad}$

$8 + 11 = \underline{\quad}$

$8 + 12 = \underline{\quad}$

$11 + 2 = \underline{\quad}$

$6 + 12 = \underline{\quad}$

$16 + 4 = \underline{\quad}$

$1 + 16 = \underline{\quad}$

$3 + 11 = \underline{\quad}$

$16 + 2 = \underline{\quad}$

$15 + 5 = \underline{\quad}$

$5 + 13 = \underline{\quad}$

$12 + 2 = \underline{\quad}$

$4 + 14 = \underline{\quad}$

$9 + 11 = \underline{\quad}$

$3 + 14 = \underline{\quad}$

$18 + 2 = \underline{\quad}$

$18 + 1 = \underline{\quad}$

$13 + 1 = \underline{\quad}$

$12 + 5 = \underline{\quad}$

$3 + 17 = \underline{\quad}$

$6 + 11 = \underline{\quad}$

$14 + 2 = \underline{\quad}$

$4 + 15 = \underline{\quad}$

$4 + 11 = \underline{\quad}$

$4 + 12 = \underline{\quad}$

$13 + 3 = \underline{\quad}$

$1 + 14 = \underline{\quad}$

$12 + 3 = \underline{\quad}$

$1 + 17 = \underline{\quad}$

$1 + 15 = \underline{\quad}$

$15 + 3 = \underline{\quad}$

$7 + 11 = \underline{\quad}$

$5 + 11 = \underline{\quad}$

$3 + 16 = \underline{\quad}$

$1 + 12 = \underline{\quad}$

$13 + 2 = \underline{\quad}$

$2 + 17 = \underline{\quad}$

## PRVOUKA

Vystřihni obrázky a nalep je, kam patří.

