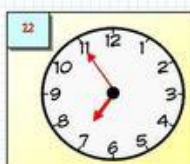
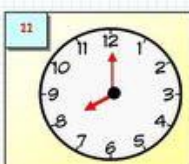
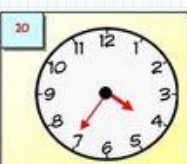

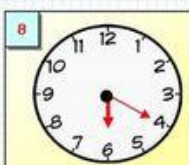
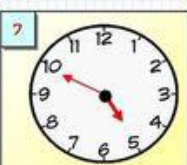
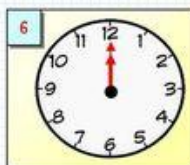
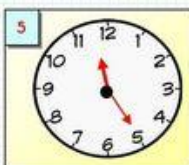
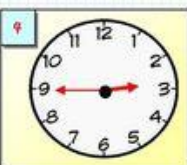
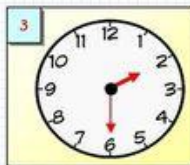
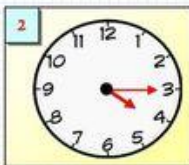
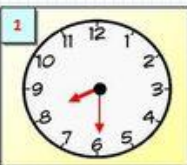




What time is it?

Match the clocks and the time in the boxes. Then copy the time under the correct clock.



1 It's half past eight.

4 It's a quarter to three.

10 It's thirty-five minutes past four.

6 It's midnight.

2 It's a quarter past four.

8 It's twenty minutes past six.

9 It's half past eleven.

7 It's ten to five.

12 It's five minutes to seven.

3 It's half past two.

11 It's eight o'clock.

5 It's twenty-five minutes past twelve.

ISLCollective.com

WHAT TIME IS IT?

Esercizi sull'orario in inglese

• Leggi l'orario in inglese sotto ogni orologio e disegna le lancette.



seven o'clock



half past four



quarter to nine



five past ten



two o'clock



twenty past six



ten to one



half past twelve



quarter past two



twenty to three



twenty-five past ten



eight o'clock